
































December 2004 weather conditions at noon at Helen Keller Elementary School in Franklin, MA.

	Mon	Tue	Wed	Thu	Fri	Sat
			1	2	3	4
						
5	6	7	8	9	10	11
						
12	13	14	15	16	17	18
						
19	20	21	22	23	24	25
						
26	27	28	29	30	31	
						

Fill in the table below and then graph the data.

Weather Condition	Total Number of Day					
Cloudy						
Partly Cloudy						
Raining						
Foggy						
Clear Skies						
Snowy						

Challenge: In the first full week of December are there more sunny days this year (2005) than last year (2004)?